

Exploring Patterns

Can you complete the pattern?

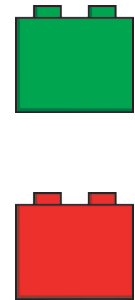


What shape comes next?

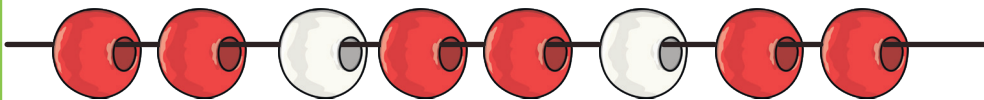
Which picture would come next? Circle it.



Which brick would come next in the pattern? Circle it.



Which bead would complete the pattern? Circle it.




1 2 3 4 5
6 7 8 9 10




Adding More

Add 2 more children to the bus.




How many children are there?

Add 1 more apple to the fruit bowl.



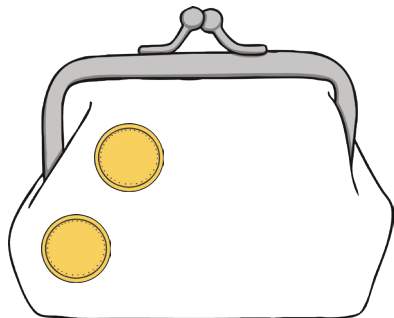
How many apples are there?

Add 4 more fish to the fish tank.



How many fish are there?

Add 3 more coins to the purse.



How many coins are there?

1 2 3 4 5
6 7 8 9 10

